

PLEASE DO NOT MARK ON THIS QUIZ PAPER!  
Your TA will collect for use in the next session.

Bubble in your ENTIRE student ID

Mark your scantron as TEST A

### Quiz E

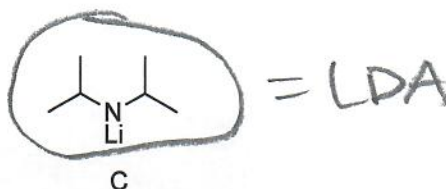
1. Stronger base?

HOMe

A

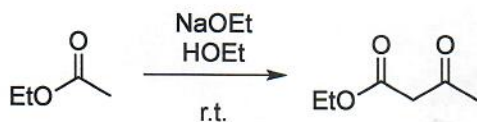
NaOMe

B



C

2. What is the name of this reaction?



Claisen  
condensation

A

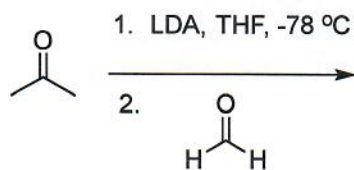
Michael  
addition

B

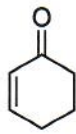
Wittig  
reaction

C

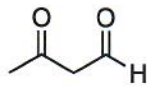
3. Predict the product.



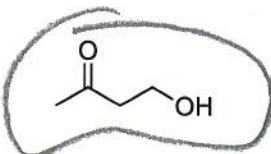
aldol reaction



A



B



C