

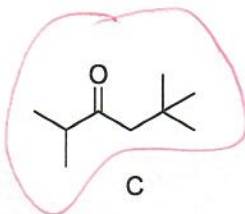
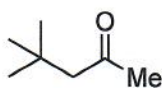
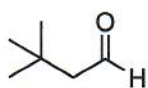
PLEASE DO NOT MARK ON THIS QUIZ PAPER!
Your TA will collect for use in the next session.

Bubble in your ENTIRE student ID

Mark your scantron as TEST A

Quiz C

1. Slowest addition of HCN?



Version

A

c b c

2. What is the pKa of TsOH?

-12

A

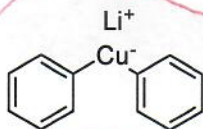
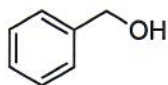
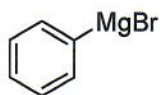
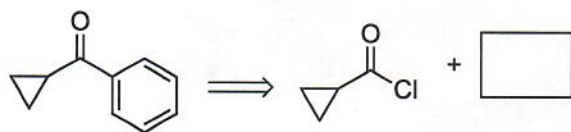
-7

B

-2

C

3. Complete the retrosyntheses.



Version B

b c b