

Key

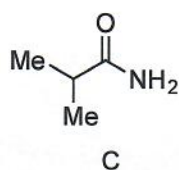
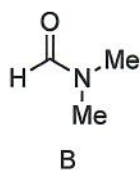
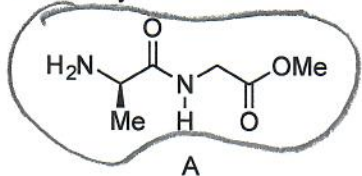
PLEASE DO NOT MARK ON THIS QUIZ PAPER!
Your TA will collect for use in the next session.

Bubble in your ENTIRE student ID

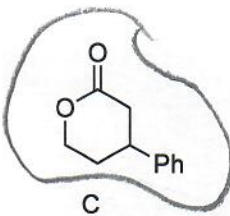
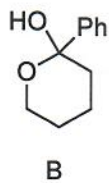
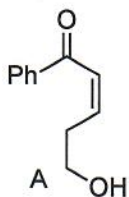
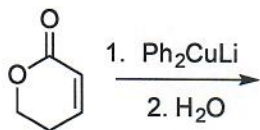
Mark your scantron as TEST A

Quiz D

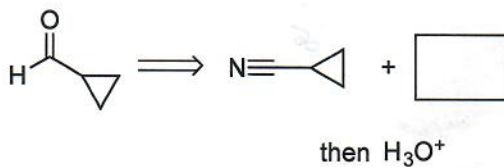
1. Secondary amide?



2. Predict the product



3. Complete the retrosyntheses.



NaOH
A

LiAlH₄
B

DIBAL-H
C